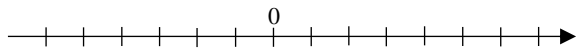
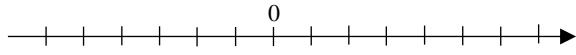


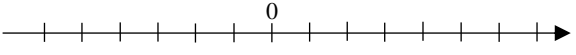
$$(+2) + (+3) =$$



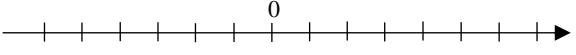
$$(-2) + (+4) =$$



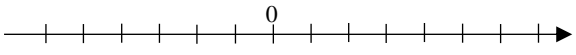
$$(-3) - (-1) =$$



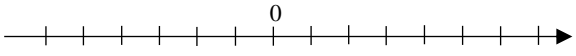
$$(+6) + (-9) =$$



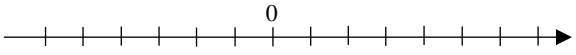
$$(+4) + (-8)$$



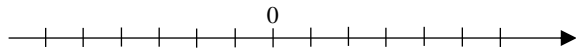
$$(-5) + (+9) =$$



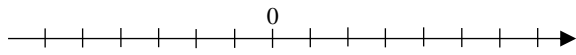
$$(-1) - (+4) =$$



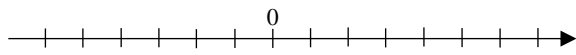
$$(+20) + (-35) =$$



$$(-4) - (-9) =$$



$$0 + (-6) =$$



$$(-5) - (+1) =$$